

ATOMIC ENERGY CENTRAL SCHOOL – 3, MUMBAI.

Periodic Test --1 (July. 2024)

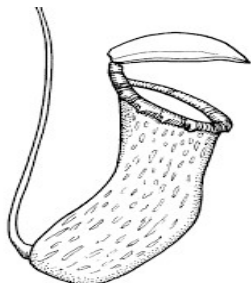
CLASS : V Sec : ____ Sub.: EVS Date: _____ Time : 1½ hrs.

Unique Identification no. : _____ Max Marks:40

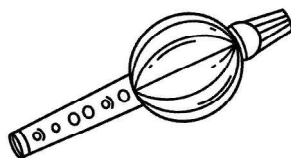
Invigilator's Sign: _____ Examiner's Sign: _____ Marks obtained

OBSERVATION AND REPORTING (15 Marks)

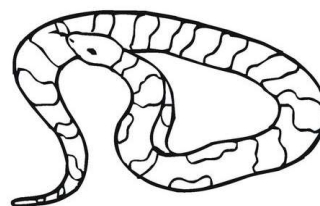
1. Identify the following pictures. (3)



a)



b)



c)

2. Choose the correct answer to fill in the blanks. (5)

Snakes, Mouth, Bamboo, George Mestral , Smell

a) Snake charmers keep snakes in _____ baskets.

b) The sense of taste and _____ are interconnected.

c) Velcro was discovered by _____

d) _____ are called friends of farmers.

e) Digestion of food begins in our _____.

3. Answer the following in one sentence. (3)

a) Who are poachers?

b) What is meant by germination of a seed?

c) How do the ants recognize their friends?

4. Name the following.

(2)

a) The liquid in our mouth that helps in digestion. _____

b) The part of the plant that grows underground. _____

5. Observe the picture and answer the following.

(2)



What is given to the patient in the picture ? Why it is given to the patient ?

IDENTIFICATION AND CLASSIFICATION (12 Marks)

6. Write true or false.

(5)

- a) Animals that are awake at night can see thing only in black and white colours.
- b) Tomatoes and green chilies came from South America. (_____)
- c) All snakes are poisonous. (_____)
- d) Kalbeliya have dance movements similar movement of a snake.(_____)
- e) Expiry date on food packs is a useless information. (_____)

7. Circle the odd one .

(2)

- a) nose skin stomach tongue
- b) sweet bitter sour foul
- c) drying freezing digesting canning
- d) chana milk rajma moong

8. Answer in one or two sentences.

(2)

- a) How do you come to know that the food got spoiled?

- b) Who are Kalbeliyas ?

9. Give any two examples for each of the following.

(3)

a) Name any two plants that we got from South America.

b) Food items sweet in taste.

c) Things made from unripe mangoes.

DISCOVERY OF FACTS (13 Marks)

10. Match the following.

(2)

A

B

a) Seed that scatters by bursting

i) Mustard

b) Seed used as spices

ii) Tur

c) Seed that scatters by wind

iii) Soyabean

d) Seed used as pulses

iv) Cotton

11. Answer in one word

(2)

a) Any one National Park in India

b) One agent of seed dispersal

c) A muscular bag in your body that churns food

d) An animal that is killed for its tusks

12. Give reasons.


(2)

a) Birds move their neck very often.

b) Glass jars and bottles are dried well in the sun before filling them with pickles.

13. Draw the picture of tongue and label the taste zones.

(3)



14. Mark the following states on the outline map of India .

(4)

a) Andhra Pradesh

b) Meghalaya

c) Rajasthan

d) Tamil Nadu

